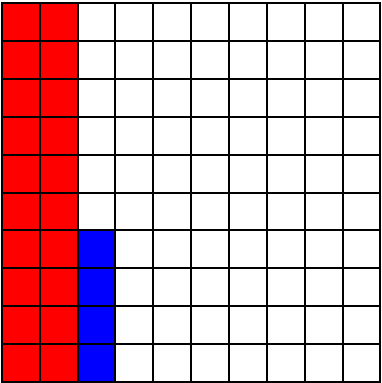


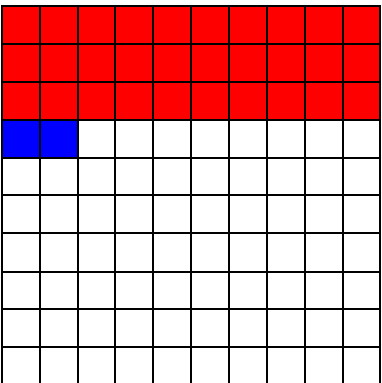





1. Pobarvaj in izračunaj.

$20 + 4 = 24$ 	$60 + 5 = \underline{\quad}$ 	$30 + 9 = \underline{\quad}$ 
$30 + 2 = 32$ 	$90 + 9 = \underline{\quad}$ 	$70 + 1 = \underline{\quad}$ 

2. Izračunaj in prikaži.

$50 + 4 = \underline{\quad}$ 	$30 + 3 = \underline{\quad}$	$20 + 5 = \underline{\quad}$	$70 + 6 = \underline{\quad}$
---	------------------------------	------------------------------	------------------------------



3. Matic je naredil 30 sneženih kep, Nejc pa **deset več**. Koliko kep sta naredila skupaj?



Račun: _____
 Odgovor: _____